





Level 1

For office use only														
A1	Individual questionnaire number							A2	Household questionnaire number					
A3	Household control sheet number							A4	Pcode from household roster					

1.  +  = 

- a) 
- b) 
- c) 
- d) 

2. $12 \div 3 =$

- a) 2
b) 3
c) 4
d) 5

3. $4 \times 7 =$

- a) 4
b) 7
c) 18
d) 28

4. If you count by 2 which number should go next? / Nayikuthi ubala ngakubili, ngiyiphi inomboro okufanele uye kiyo kokulandelako?

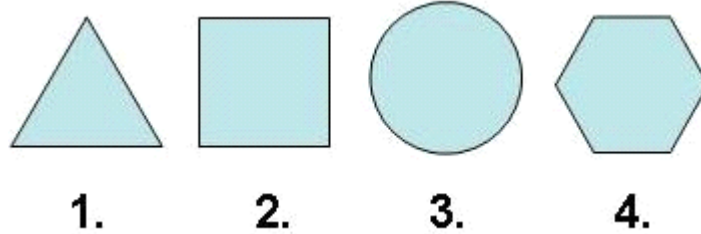
2 4 6 8 10 ?

- a) 10
b) 11
c) 12

- d) 13
5. $16 \div 8 = 2$

- a) +
b) -
c) x
d) ÷

6. Which shape is the odd one out? / Ngisiphi isibumbeko esihlukileko?



- a) 1.
b) 2.
c) 3
d) 4.

7. Which item is the cheapest? / Ngiyiphi into engabizi khulu?



a) R1.80

b) R2.00

c) 0.90c

d) R5.00

8. What time is on the clock? / Sikhathibani ewatjhini?




- a) 2
b) 2:30
c) 3
d) 3:30

9. 1cm = ? / Isenthimitha linye lilingana?

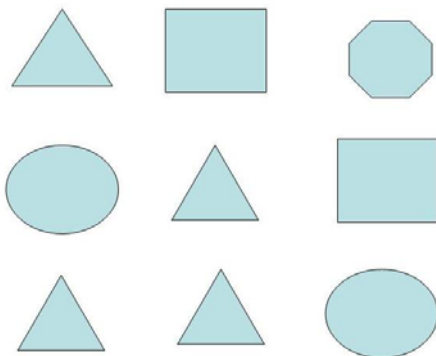
- a) 10 mm / namamilimitha ali-10
b) 100 mm / namamilimitha ali-100
c) 1000 mm / namamilimitha ayi-1000
d) 10000 mm / namamilimitha azi-10000

10. How many squares are shaded? / Zingaki iinkwere ezinzima?




- a) 2 out of 16 / Zimbili kwezilitjhumi nasithandathu
- b) 3 out of 16 / Zintathu kwezilitjhumi nasithandathu
- c) 4 out of 16 / Zine kwezilitjhumi nasithandathu
- d) 5 out of 16 / Zihlanu kwezilitjhumi nasithandathu

11. How many triangles are in this figure? / Bangaki aboncantathu esithombeni lesi?




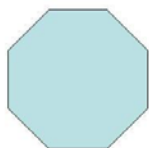
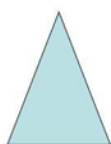
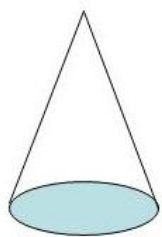
- a) 2
- b) 3
- c) 4
- d) 5

12. How many sides does this object have? / Into le inamahlangothi amangaki?



- a) 4
- b) 5
- c) 6
- d) 7

13. Which shape makes base of the cone? / Ngisiphi isibumbeko esenza isisekelo sekhoni?



a)

b)

c)

d)

14. Which city had the hottest temperature? / Ngiliphi idorobha elinezinga lokutjhisa eliphezulu khulu?

City / Idorobha	Temperature ° C / Izinga lokutjhisa ngamaselsiyasi
Cape Town	25
Johannesburg	24
Harare	20
Nairobi	22

- a) Cape Town
- b) Johannesburg
- c) Harare
- d) Nairobi

15. How many of these numbers are greater than 6? / Zingaki iinomboro kilezi ezidlula u-6?

2, 4, 6, 3, 8, 1, 11, 12

- a) 3
- b) 4
- c) 6
- d) 7